


The Meaning of Division

Use division when you want to separate objects into groups of equal size.

You have 12 marbles.



You want to make 3 groups of equal size.




You put 4 marbles in each group.

Say: 12 divided by 3 equals 4.

Write: $12 \div 3 = 4$

Solve.



How many in all? _____

How many groups? _____

How many in each group? _____

$$12 \div 2 = \underline{\quad}$$




How many in all? _____

How many groups? _____

How many in each group? _____

$$12 \div 6 = \underline{\quad}$$




How many in all? _____

How many groups? _____

How many in each group? _____

$$8 \div 2 = \underline{\quad}$$



How many in all? _____

How many groups? _____

How many in each group? _____

$$8 \div 4 = \underline{\quad}$$